





1. James has 6 bread rolls. He shares them equally with his sister. How many do they have each?



2. Evie buys 8 oranges at the shop. She shares them equally with her friend. How many oranges do they have each?





3. Imran has 10 ice creams. He eats two every day. How many days will his ice creams last?



4. Ben has 2 bottles of water. He shares them with his friend. How many bottles do they each have?






5. A shop has 4 bags of crisps. Two people want to buy them. How many bags can they each buy if they are shared equally?



6. Javeria has 12 potatoes. She shares them with her brother. How many do they have each?





7. Olivia buys 15 boxes of cereal for her and her two brothers. They share them equally. How many boxes of cereal will they have each?



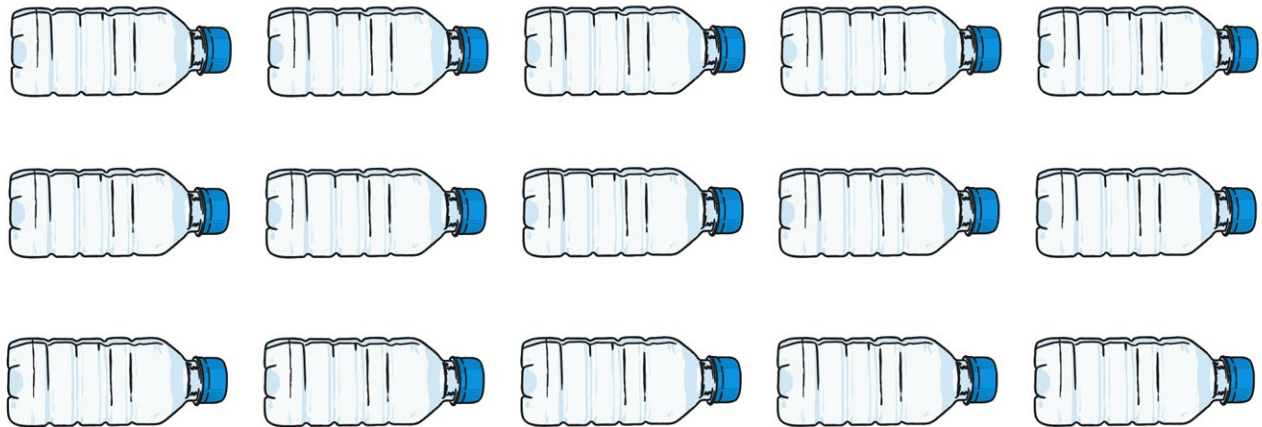
8. Amy buys 10 cupcakes. She shares them equally with her sister. How many cupcakes do they each have?




Food Division Answers

- Q1) James has 6 bread rolls. He shares them equally with his sister. How many do they have each?
3 bread rolls each
- Q2) Evie buys 8 oranges at the shop. She shares them equally with her friend. How many oranges do they have each?
4 oranges each
- Q3) Imran has 10 ice creams. He eats two every day. How many days will his ice creams last?
5 days
- Q4) Ben has 2 bottles of water. He shares them with his friend. How many bottles do they each have?
1 each
- Q5) A shop has 4 bags of crisps. Two people want to buy them. How many bags can they each buy if they are shared equally?
2 bags each
- Q6) Javeria has 12 potatoes. She shares them with her brother. How many do they have each?
6 potatoes each
- Q7) Olivia buys 15 boxes of cereal for her and her two brothers. They share them equally. How many boxes of cereal will they have each?
5 boxes each
- Q8) Amy buys 10 cupcakes. She shares them equally with her sister. How many cupcakes do they each have?
5 cupcakes each


1. Michelle buys 15 bottles of water. She shares them equally between her three children. How many do they each get?




2. A shop has 40 sausage rolls on sale. If five friends buy them and share them equally, how many do they each get?



3. Jessica buys 14 bread rolls. She has two every day. How many days will she have bread rolls for?




4. Amaan loves apples. He eats three every day. How many days will 30 apples last for?



5. Dan gives his five children their pocket money to spend at the shop. He has £20. How much would each child get if they shared the money equally?




6. Sidra bought a bag of 50 chicken nuggets and eats 5 of them for each meal. How many meals will the bag last for?



7. Phil bought 35 mini cakes for a birthday party. Four other children came and shared the cakes equally with Phil. How many cakes did each child get?




8. A punnet has 24 strawberries in it. How many strawberries would two people get each if they shared them equally?




Food Division Answers

- Q1) Michelle buys 15 bottles of water. She shares them equally between her three children. How many do they each get?
5 bottles of water each
- Q2) A shop has 40 sausage rolls on sale. If five friends buy them and share them equally, how many do they each get?
8 sausage rolls each
- Q3) Jessica buys 14 bread rolls. She has two every day. How many days will she have bread rolls for?
7 days
- Q4) Amaan loves apples. He eats three every day. How many days will 30 apples last for?
10 days
- Q5) Dan gives his five children their pocket money to spend at the shop. He has £20. How much would each child get if they shared the money equally?
£4 each
- Q6) Sidra bought a bag of 50 chicken nuggets and eats 5 of them for each meal. How many meals will the bag last for?
10 meals
- Q7) Phil bought 35 mini cakes for a birthday party. Four other children came and shared the cakes equally with Phil. How many cakes did each child get?
7 cakes each
- Q8) A punnet has 24 strawberries in it. How many strawberries would two people get each if they shared them equally?
12 strawberries each

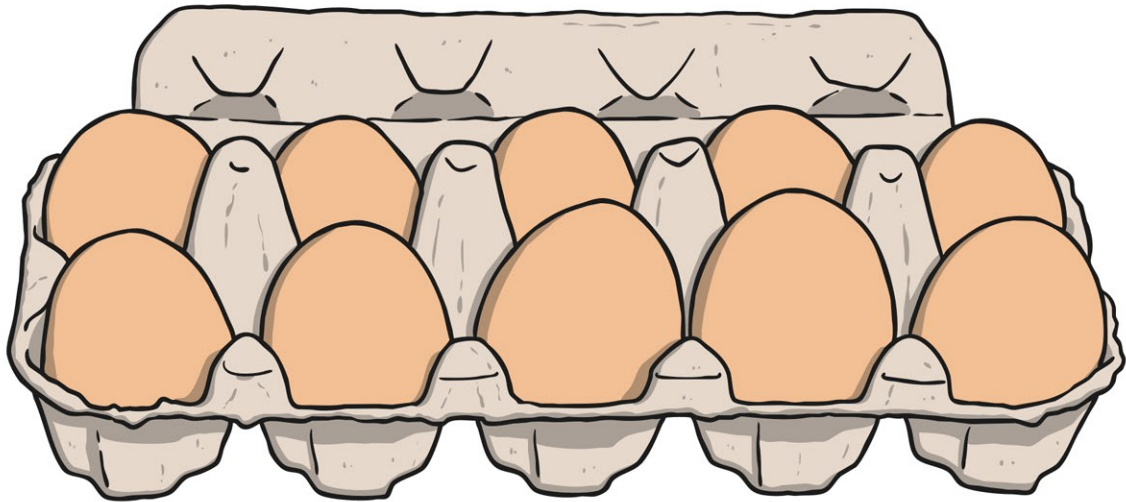
1. Mia buys 45 pears from the shop. She shares them equally between herself and 4 friends. How many pears do they have each?



2. Geeta bought 60 cherries from the shop. She wanted to share them equally with her Mum. How many cherries would they each have?



3. Edward has 40 eggs. He puts 10 eggs in each box. How many boxes does he need?




4. Lily is given 35p change from the shopkeeper. She needs to divide the change equally between 7 people. How much change will they each get?



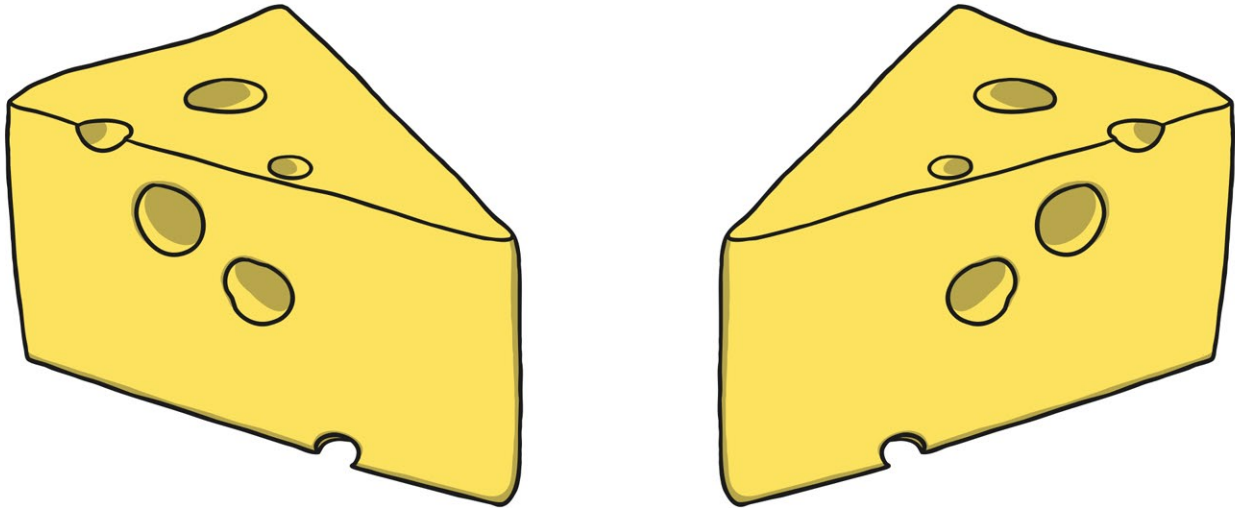
5. Sirraaj buys 30 cartons of orange juice. He shares them equally between himself and his five friends. How many cartons of orange juice do they each get?



6. A lorry delivers 80 bananas to the shop. Each box has 10 bananas in it. How many boxes are there altogether?



7. A shop has 55 blocks of cheese. Five customers would like to equally share all of the cheese. How many blocks of cheese can they each buy?



8. A shopkeeper has 100 tins of baked beans. They arrange them into rows of 10 cans. How many rows will they need altogether?



Food Division Answers

- Q1) Mia buys 45 pears from the shop. She shares them equally between herself and 4 friends. How many pears do they have each?
9 pears each
- Q2) Geeta bought 60 cherries from the shop. She wanted to share them equally with her Mum. How many cherries would they each have?
30 cherries each
- Q3) Edward has 40 eggs. He puts 10 eggs in each box. How many boxes does he need?
4 boxes
- Q4) Lily is given 35p change from the shopkeeper. She needs to divide the change equally between 7 people. How much change will they each get?
5p each
- Q5) Siraaj buys 30 cartons of orange juice. He shares them equally between himself and his five friends. How many cartons of orange juice do they each get?
5 bottles each
- Q6) A lorry delivers 80 bananas to the shop. Each box has 10 bananas in it. How many boxes are there altogether?
8 boxes altogether
- Q7) A shop has 55 blocks of cheese. Five customers would like to equally share all of the cheese. How many blocks of cheese can they each buy?
11 blocks of cheese each
- Q8) A shopkeeper has 100 tins of baked beans. They arrange them into rows of 10 cans. How many rows will they need altogether?
10 rows (with 10 cans in each row)